
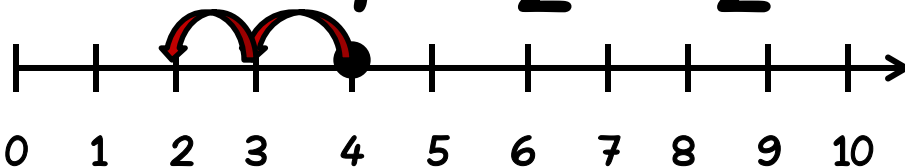


Name _____

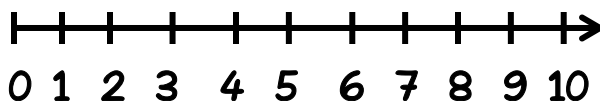
Date _____

Directions: Use the number line to subtract.

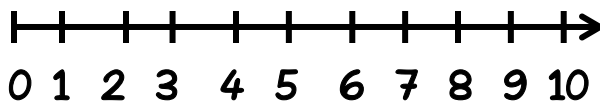
$$4 - 2 = 2$$



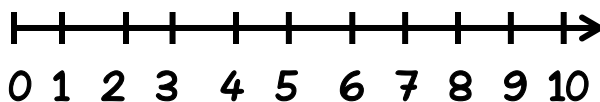
$5 - 3 = \underline{\quad}$



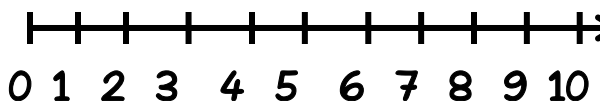
$8 - 1 = \underline{\quad}$



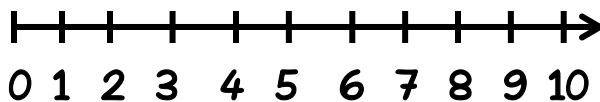
$6 - 2 = \underline{\quad}$



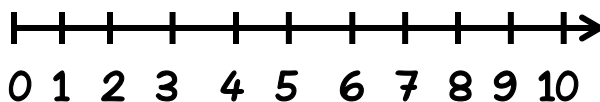
$5 - 5 = \underline{\quad}$



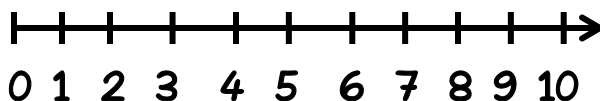
$9 - 4 = \underline{\quad}$



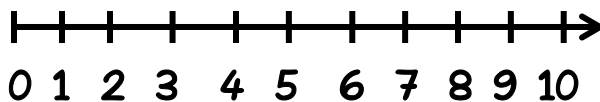
$3 - 3 = \underline{\quad}$



$7 - 2 = \underline{\quad}$



$6 - 6 = \underline{\quad}$


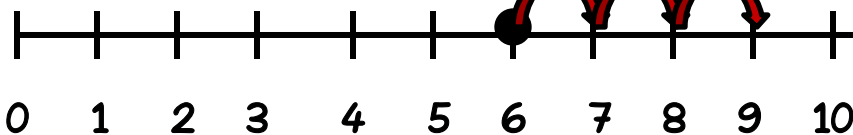


Name _____

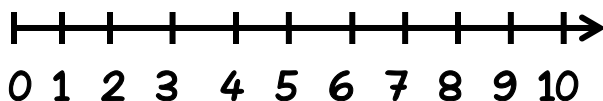
Date _____

Directions: Use the number line to add.

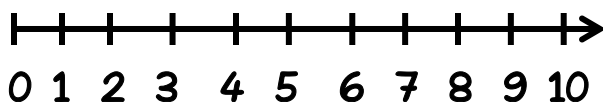
$$6 + 3 = 9$$



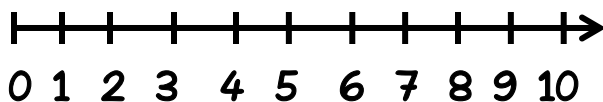
$7 + 3 = \underline{\quad}$



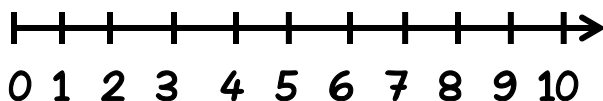
$3 + 5 = \underline{\quad}$



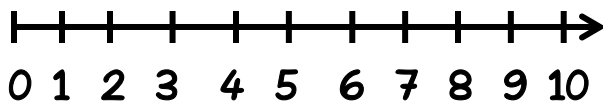
$2 + 6 = \underline{\quad}$



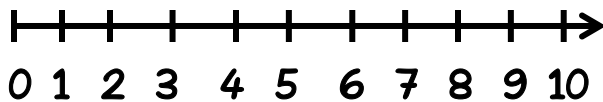
$6 + 1 = \underline{\quad}$



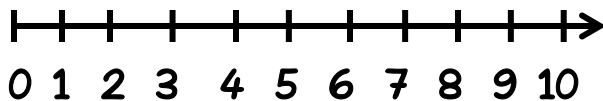
$8 + 2 = \underline{\quad}$



$4 + 3 = \underline{\quad}$



$5 + 2 = \underline{\quad}$



$3 + 6 = \underline{\quad}$

